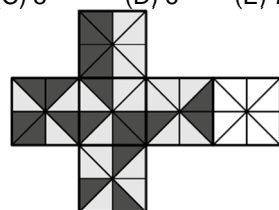


23. The figure shows the plan of the seven train routes of a small town. The circles indicate the stations. Martin wants to paint the lines in such a way that if two lines share a common station, then they are painted with different colours. What is the smallest number of colours that he can use?
 (A) 3 (B) 4 (C) 5 (D) 6 (E) 7

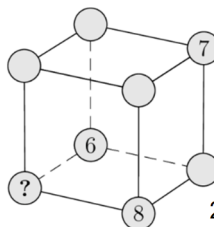
24. Dima wants to fold the net shown to make a cube. He wants the triangles that touch the edges of neighbouring faces of the cube to be shaded the same. How should he shade the triangles of the unshaded square in the net?



- (A) (B) (C) (D) (E)

25. Simon takes four cups out of the cupboard and puts them randomly on the four saucers. Which statement is correct?

- (A) It is certain that none of the 4 cups stands on its matching saucer. (B) It is certain that exactly 1 cup stands on its matching saucer. (C) It is impossible for exactly 2 cups to stand on its matching saucer. (D) It is impossible for exactly 3 cups to stand on its matching saucer. (E) It is impossible for all 4 cups to stand on its matching saucer.



26. There are circles at the vertices of the cube. Mary wants to write the numbers 1 to 8 in these circles. She wants the sum of the numbers in the circles around each face of the cube to be the same. The numbers 6, 7 and 8 are already written, as shown. What number should be written in the circle with a question mark?
 (A) 1 (B) 2 (C) 3 (D) 4 (E) 5

27. A grandmother has some candies. She decides to divide them up amongst her grandchildren so that each has a bag containing same number of candies. She puts the largest possible number of candies in each bag and, when she is done, she sees that there are 20 candies in each bag and 12 candies are left over. What is the smallest possible number of candies she could have?

- (A) 52 (B) 232 (C) 272 (D) 411 (E) 432

28. Mikhail plans to cut a rope into 12 equal pieces and marks points where he needs to cut. Mate plans to cut the same rope into 16 equal pieces and marks points where he needs to cut. Then Maya cuts the rope at all the marked points. How many pieces does Maya get?

- (A) 24 (B) 25 (C) 27 (D) 28 (E) 29

29. Emma is playing with the seven caterpillar puzzle pieces shown. She wants to build a caterpillar that has one head, one tail and either one, two or three puzzle pieces in between. How many different caterpillars could Emma build without flipping pieces?



- (A) 10 (B) 14 (C) 16 (D) 18 (E) 20

30. Rem writes a three-digit number on the whiteboard. Then Mark writes a fourth digit to the right of the previous ones. He says "Look! The number increased by 2024". What digit did Mark write?

- (A) 2 (B) 3 (C) 4 (D) 8 (E) 9



Starptautiskā konkursa „Kengurs” uzdevumi



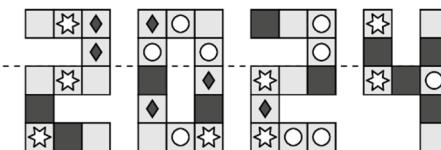
21.03.2024.

5.-6. klases

3 point problems

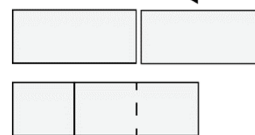
1. Alina folds the image below along the dashed line. Which of the following squares folds onto an identical one?

- (A) (B) (C) (D) (E)



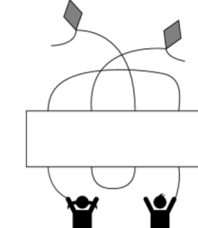
2. The picture shows the first few squares of a hopping game. Every fourth square in the game has the same image in it. Mia is playing the game. In which of the following squares will Mia land only on her right foot?

- (A) the 10th (B) the 15th (C) the 20th (D) the 22nd (E) the 23rd



3. Two identical rectangles, each with an area of 18, partially overlap to form a new rectangle, as shown. The new rectangle can be divided into three equal squares with the middle square having two layers. What is the area of the new rectangle?

- (A) 24 (B) 27 (C) 30 (D) 32 (E) 36

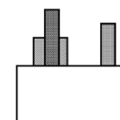


4. Which of the strips should be placed in the space in the picture so that each child is connected to a different kite?

- (A) (B) (C) (D) (E)

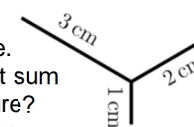
5. Dina has set up her three bricks on the floor behind a wall. When seen from the front, the bricks look as shown. How do the bricks look from the back?

- (A) (B) (C) (D) (E)



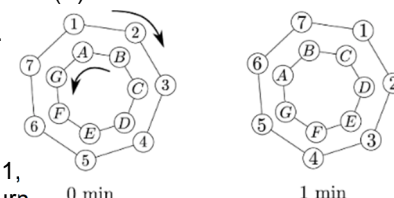
6. Tim wants to draw the figure shown without lifting his pencil off the paper. The lengths of the three segments are given in the figure. He can choose to start his drawing anywhere. What is the smallest sum of the lengths of all the segments that Tim must draw to get the figure?

- (A) 6 cm (B) 7 cm (C) 8 cm (D) 9 cm (E) 10 cm

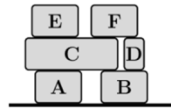


7. There are 2 wheels each marked with 7 positions. The wheels spin in opposite directions and each makes a complete turn in seven minutes. At the end of each minute, each letter lies exactly in front of a number. The picture shows the first two positions of the wheels and we can see that initially letter A is in front of number 1, letter B is in front of number 2, and so on. The wheels turn until letter C is in front of number 2. Which number is the letter F in front of at this moment?

- (A) 1 (B) 4 (C) 5 (D) 6 (E) 7



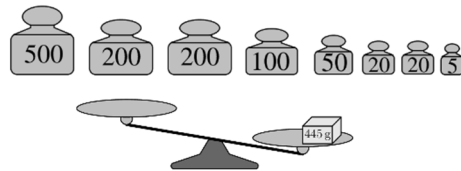
8. There are six boxes on a truck as shown. A worker puts them on the floor. He takes one box at a time, provided that box does not have another box on top of it. He places his box on the ground or on top of another box. Which of the following stacks could he not build?



- (A) (B) (C) (D) (E)

9. Pieter has a package of 445 g and eight weights. He put the package on the scale, as shown. What is the minimum number of weights he needs to balance the scale?

- (A) 2 (B) 3 (C) 4 (D) 5 (E) 6



10. The rooms in the hotel are numbered in ascending order, starting from 1. No number is omitted. Kangaroo counted the digits in the rooms and found digit 2 14 times and digit 5 3 times. What is the largest number of rooms there can be in the hotel?

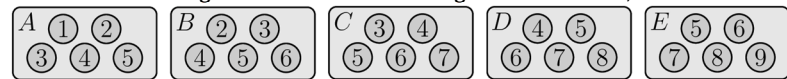
- (A) 25 (B) 26 (C) 34 (D) 35 (E) 41

4 point problems

11. Grandpa first divided all his socks into threesomes and then rearranged everything into pairs. He had seven fewer threes than pairs. How many socks had Grandpa?

- (A) less than 29 (B) more than 29 but less than 37 (C) more than 37 but less than 49 (D) more than 49 but less than 59 (E) more than 59

12. A student had five boxes of chocolates labelled A, B, C, D and E. The chocolates in the boxes have been given numbers according to their flavour, as shown.



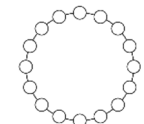
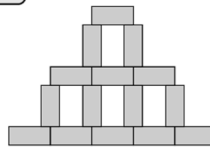
He ate most of the chocolates. The picture below shows what is left. What was the label of the box marked X?



- (A) A (B) B (C) C (D) D (E) E

13. Rose draws a composition consisting of identical rectangles as shown. The width of the base of the composition is 45 cm, the height is 30 cm. What is the area of one rectangle?

- (A) 24 cm^2 (B) 27 cm^2 (C) 30 cm^2 (D) 33 cm^2 (E) 36 cm^2

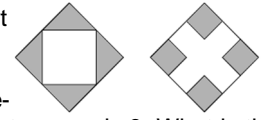


14. Each of the 16 circles shown contains a number. Numbers in neighbouring circles differ by 1. One of the circles contains the number 5 and another one contains 13. How many different numbers are written in the 16 circles?

- (A) 9 (B) 10 (C) 13 (D) 14 (E) 16

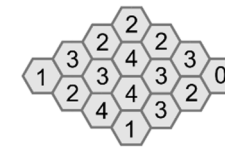
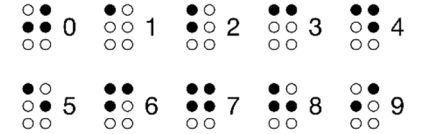
15. The diagram shows two large squares with the same area. Part of each square is shaded, as shown. In the first square, the midpoints of adjacent sides are joined. In the second square, four smaller squares all with side-lengths equal to a third of the side-length of the large square are shaded. The area shaded in the first square is 9. What is the area shaded in the second square?

- (A) 4 (B) 8 (C) 9 (D) 10 (E) 12



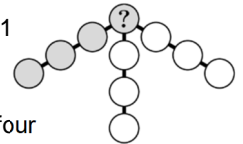
16. The Braille system for blind people, when written down, has the digits 0 to 9 represented by a set of black or white dots, as shown. How many different two-digit numbers contain exactly five black dots?

- (A) 16 (B) 18 (C) 30 (D) 32 (E) 34



17. The figure below shows a beehive with 16 cells. Some of the cells contain honey. The number in each cell indicates how many of its neighbouring cells contain honey. Two cells are neighbours if they share a common side. How many cells in the beehive contain honey?

- (A) 7 (B) 8 (C) 9 (D) 10 (E) 11

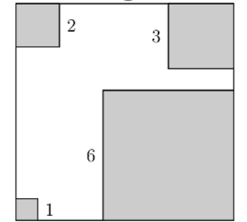


18. Annie wants to place the numbers 1 to 10 in the circles in the diagram with one number in each circle. She wants the sum of the numbers in any four circles that are in a straight line, for example the four grey ones, to be 23. What number must she place in the circle containing the question mark?

- (A) 4 (B) 5 (C) 6 (D) 7 (E) 8

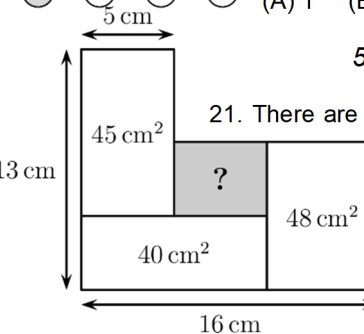
19. Christian has cut four small squares from the corners of the larger square, so that the remaining area is half of the area of the original square. The side-lengths of the small squares are shown in the diagram. What is the perimeter of the remaining shape?

- (A) 36 (B) 40 (C) 44 (D) 48 (E) 52



20. Rita wants to complete the puzzle shown so that each row and each column contain the numbers 1, 2, 3 and 4 exactly once. She wants to place the numbers so that the greater than and less symbols ($>$ and $<$) give a correct relationship between the two values either side of them. The symbols work in all directions, as shown in the example. What number should she place in the gray circle?

- (A) 1 (B) 2 (C) 3 (D) 4 (E) 2 or 3



5 point problems

21. There are three identical special dice on the table. What is the sum of the numbers on the faces that touch the table?

- (A) 26 (B) 40 (C) 43 (D) 47 (E) 56



22. The diagram shows four rectangles. What is the area of the shaded rectangle?

- (A) 12 cm^2 (B) 14 cm^2 (C) 16 cm^2 (D) 18 cm^2 (E) 20 cm^2